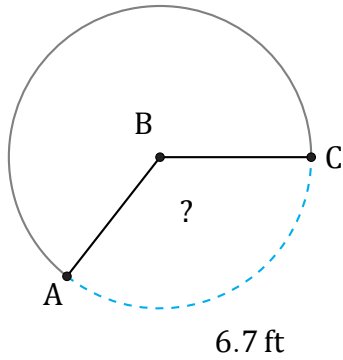


Amplitud de Arcos (H)

Nombre: _____

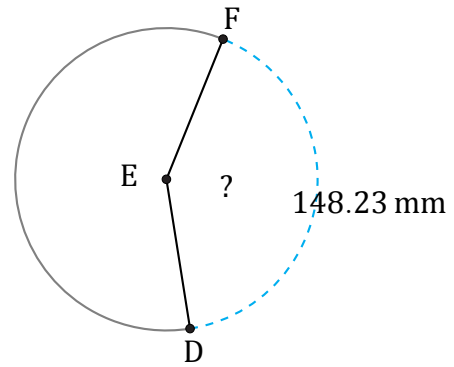
Fecha: _____

Calcule la amplitud angular de cada arco.



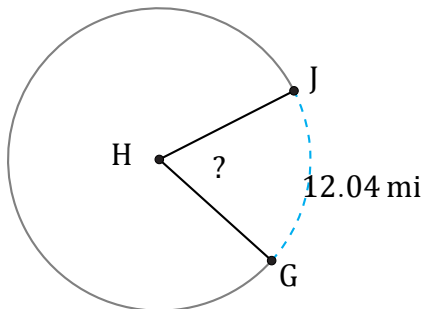
Diámetro = 6 ft

$\angle ABC =$



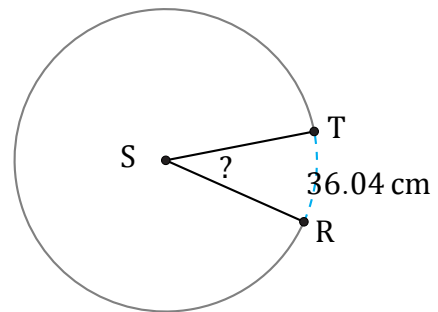
Radio = 57 mm

$\angle DEF =$



Diámetro = 20 mi

$\angle GHJ =$



Radio = 59 cm

$\angle RST =$