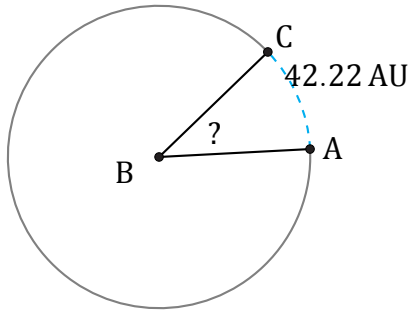


Amplitud de Arcos (I)

Nombre: _____

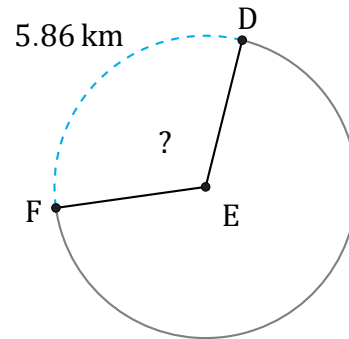
Fecha: _____

Calcule la amplitud angular de cada arco.



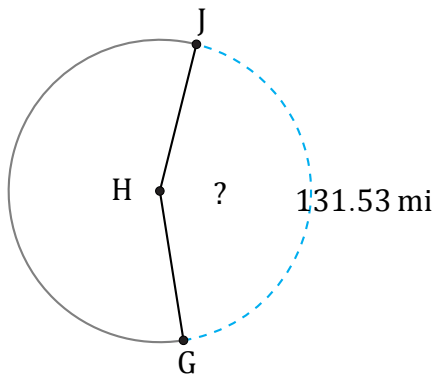
Diámetro = 118 AU

$\angle ABC =$



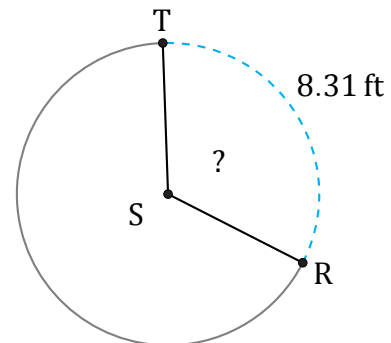
Diámetro = 6 km

$\angle DEF =$



Radio = 48 mi

$\angle GHJ =$



Radio = 4 ft

$\angle RST =$