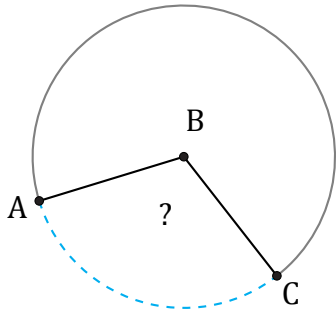


# Amplitud de Arcos (J)

Nombre: \_\_\_\_\_

Fecha: \_\_\_\_\_

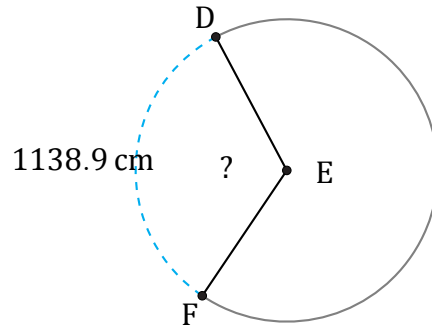
Calcule la amplitud angular de cada arco.



7.75 in

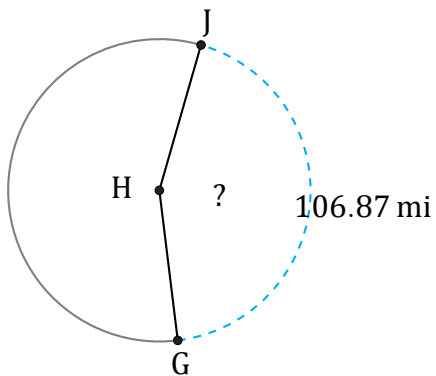
Diámetro = 8 in

$\angle ABC =$



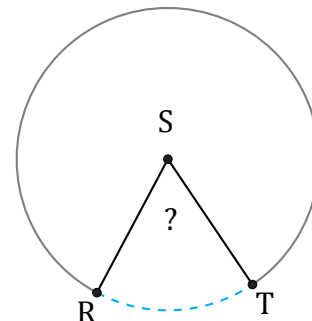
Radio = 553 cm

$\angle DEF =$



Diámetro = 78 mi

$\angle GHJ =$



Radio = 58 in

$\angle RST =$