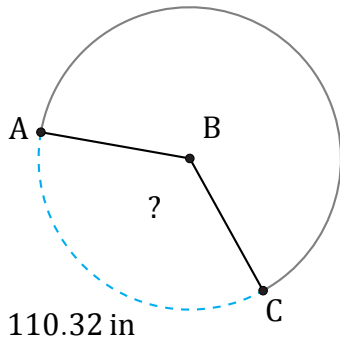


Amplitud de Arcos (B)

Nombre: _____

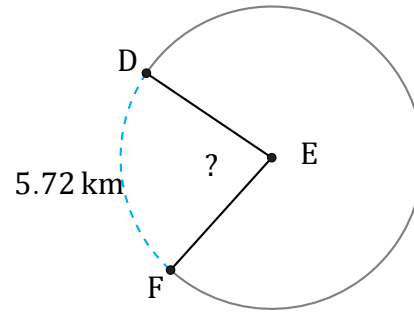
Fecha: _____

Calcule la amplitud angular de cada arco.



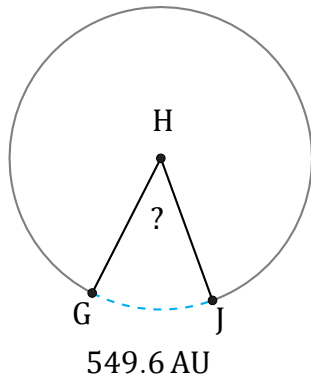
Circunferencia = 307.88 in

$\angle ABC =$



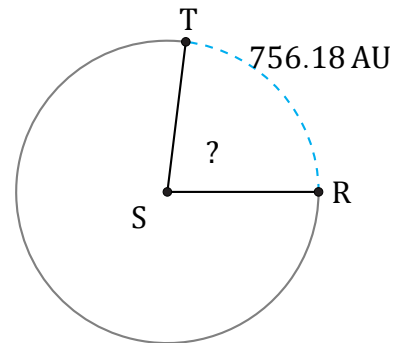
Radio = 4 km

$\angle DEF =$



Diámetro = 1340 AU

$\angle GHJ =$



Circunferencia = 3279.82 AU

$\angle RST =$