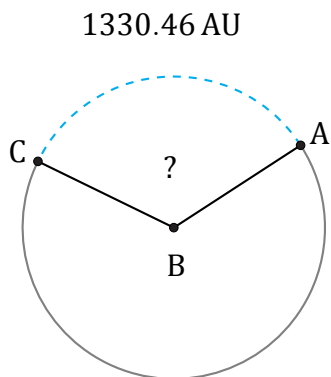


# Amplitud de Arcos (C)

Nombre: \_\_\_\_\_

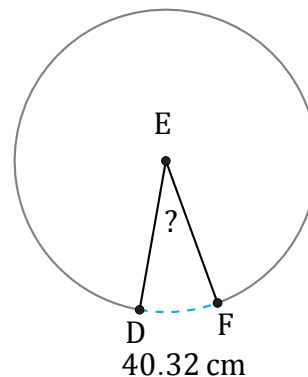
Fecha: \_\_\_\_\_

Calcule la amplitud angular de cada arco.



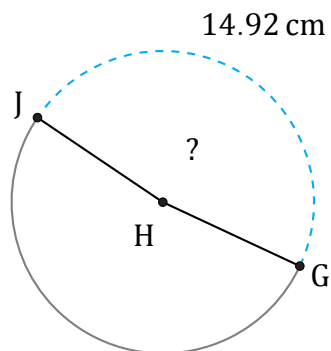
Radio = 630 AU

$\angle ABC =$



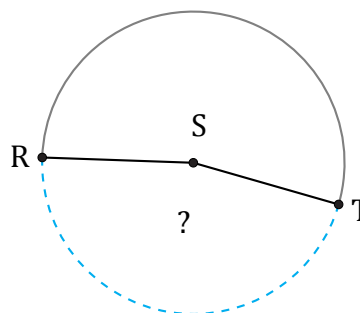
Diámetro = 154 cm

$\angle DEF =$



Diámetro = 10 cm

$\angle GHJ =$



8.69 in

Circunferencia = 18.85 in

$\angle RST =$