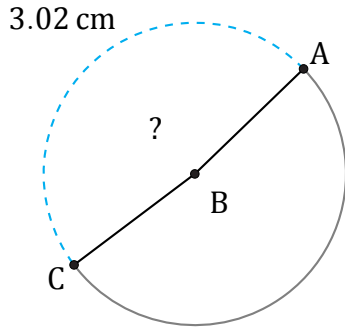


# Amplitud de Arcos (D)

Nombre: \_\_\_\_\_

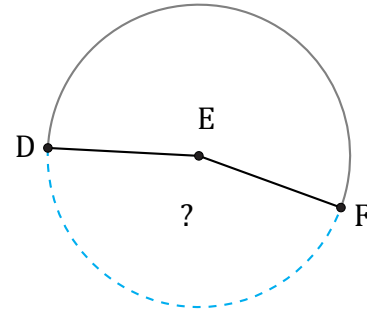
Fecha: \_\_\_\_\_

Calcule la amplitud angular de cada arco.



Circunferencia = 6.28 cm

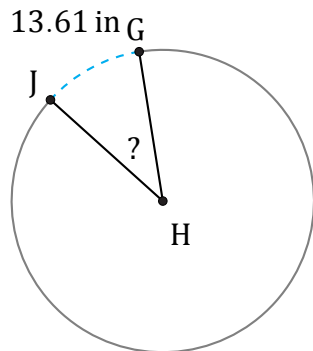
$\angle ABC =$



697 in

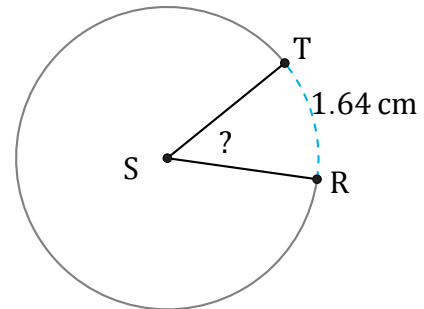
Diámetro = 490 in

$\angle DEF =$



Diámetro = 40 in

$\angle GHJ =$



Radio = 2 cm

$\angle RST =$