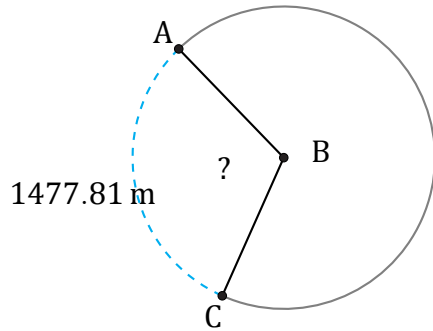


Amplitud de Arcos (G)

Nombre: _____

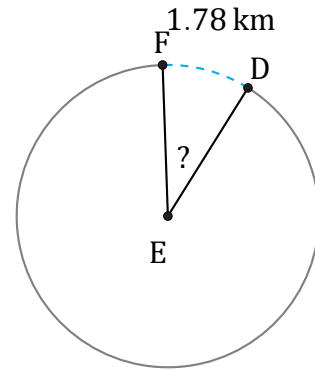
Fecha: _____

Calcule la amplitud angular de cada arco.



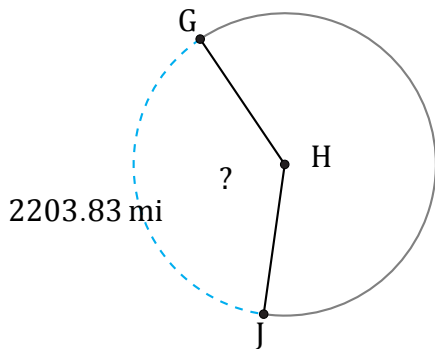
Circunferencia = 4750.09 m

$\angle ABC =$



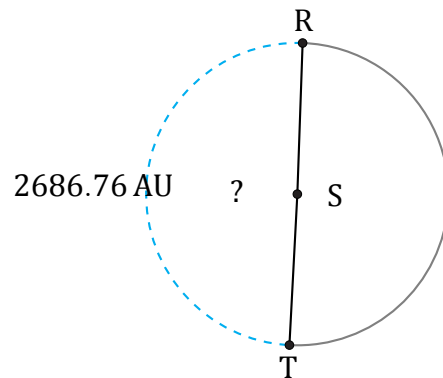
Circunferencia = 18.85 km

$\angle DEF =$



Radio = 915 mi

$\angle GHJ =$



Diámetro = 1720 AU

$\angle RST =$