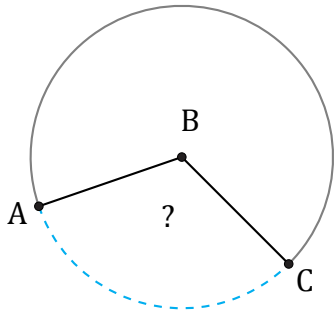


Amplitud de Arcos (I)

Nombre: _____

Fecha: _____

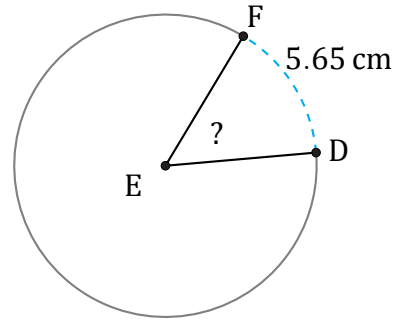
Calcule la amplitud angular de cada arco.



188.29 ft

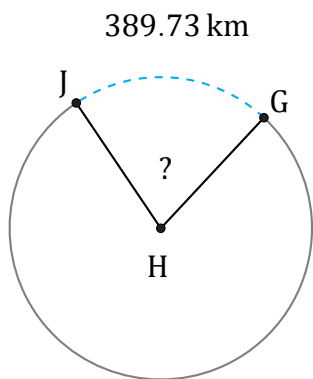
Circunferencia = 584.34 ft

$\angle ABC =$



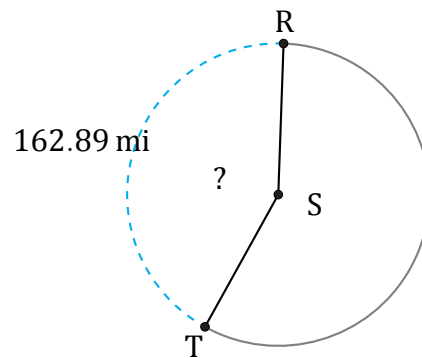
Diámetro = 12 cm

$\angle DEF =$



Radio = 290 km

$\angle GHJ =$



Circunferencia = 383.27 mi

$\angle RST =$