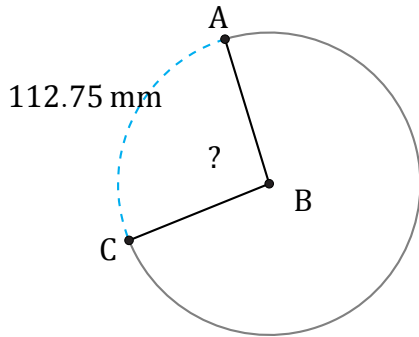


Amplitud de Arcos (J)

Nombre: _____

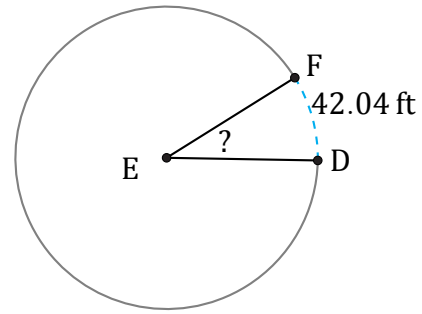
Fecha: _____

Calcule la amplitud angular de cada arco.



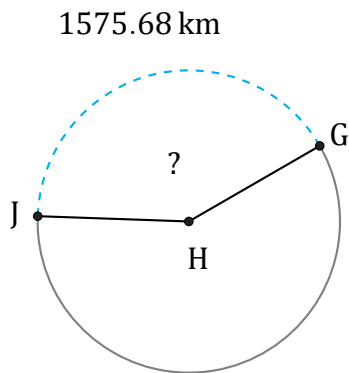
Radio = 68 mm

$\angle ABC =$



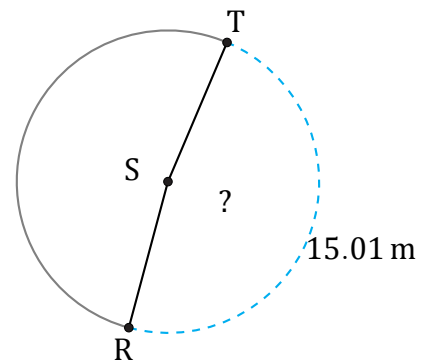
Radio = 73 ft

$\angle DEF =$



Diámetro = 1220 km

$\angle GHJ =$



Circunferencia = 31.42 m

$\angle RST =$