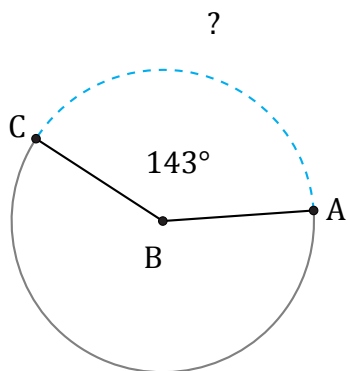


# Amplitud y Longitud de Arcos (A)

Nombre: \_\_\_\_\_

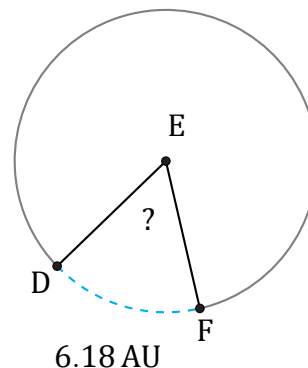
Fecha: \_\_\_\_\_

Calcule la amplitud angular o la longitud de cada arco.



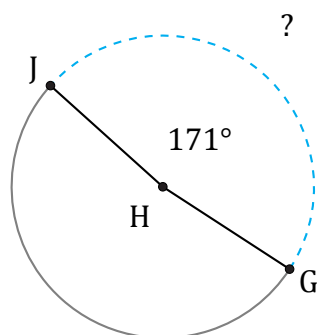
Circunferencia = 62.83 m

$\widehat{AC} =$



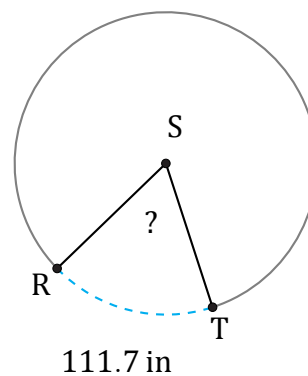
Circunferencia = 37.7 AU

$\angle DEF =$



Circunferencia = 245.04 m

$\widehat{GJ} =$



Circunferencia = 628.32 in

$\angle RST =$