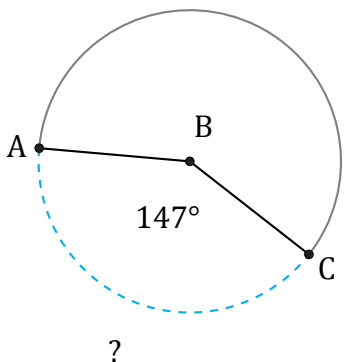


Amplitud y Longitud de Arcos (B)

Nombre: _____

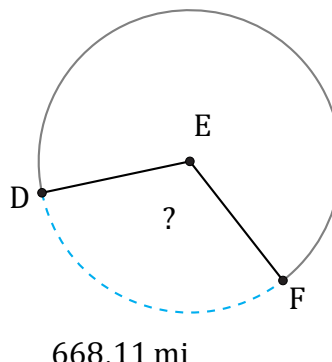
Fecha: _____

Calcule la amplitud angular o la longitud de cada arco.



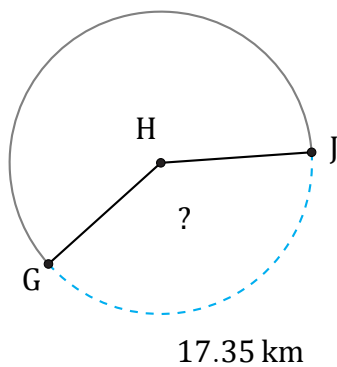
Circunferencia = 433.54 km

$\widehat{AC} =$



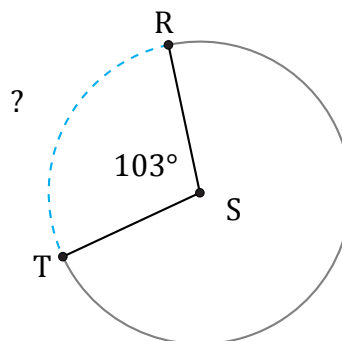
Circunferencia = 2073.45 mi

$\angle DEF =$



Circunferencia = 43.98 km

$\angle GHJ =$



Circunferencia = 578.05 ft

$\widehat{RT} =$