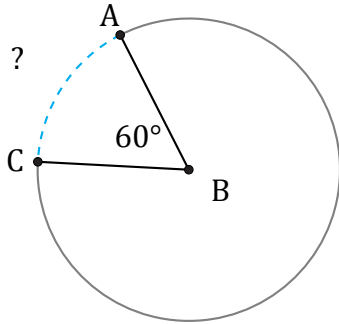


Amplitud y Longitud de Arcos (C)

Nombre: _____

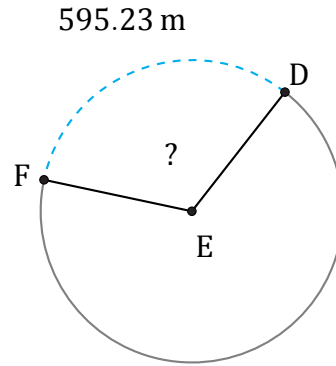
Fecha: _____

Calcule la amplitud angular o la longitud de cada arco.



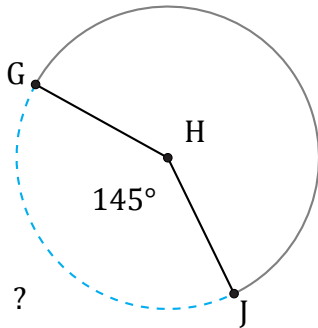
Circunferencia = 540.35 km

$\widehat{AC} =$



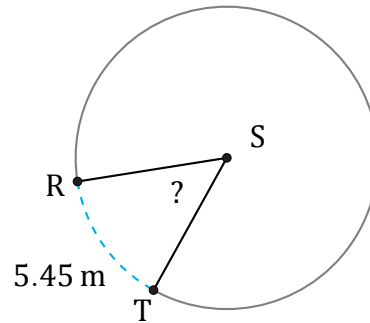
Circunferencia = 1847.26 m

$\angle DEF =$



Circunferencia = 270.18 cm

$\widehat{GJ} =$



Circunferencia = 37.7 m

$\angle RST =$