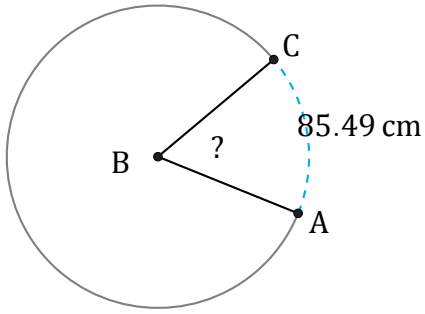


Amplitud y Longitud de Arcos (D)

Nombre: _____

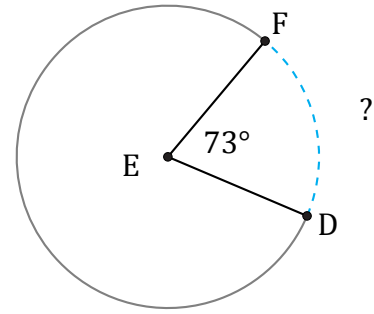
Fecha: _____

Calcule la amplitud angular o la longitud de cada arco.



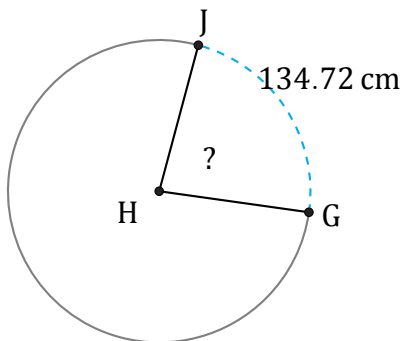
Circunferencia = 496.37 cm

$\angle ABC =$



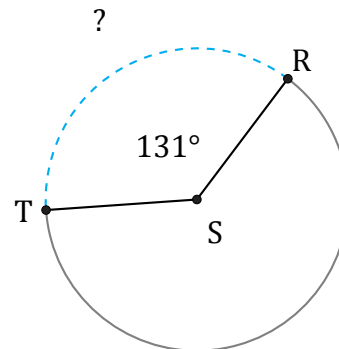
Circunferencia = 5403.54 ft

$\widehat{DF} =$



Circunferencia = 584.34 cm

$\angle GHJ =$



Circunferencia = 6144.96 cm

$\widehat{RT} =$