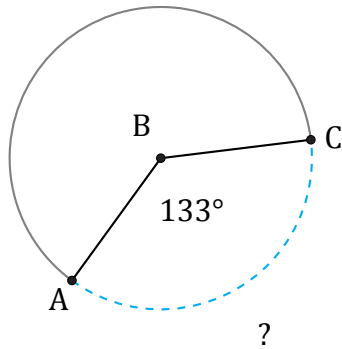


Amplitud y Longitud de Arcos (E)

Nombre: _____

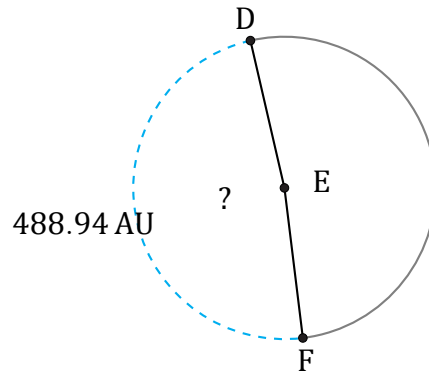
Fecha: _____

Calcule la amplitud angular o la longitud de cada arco.



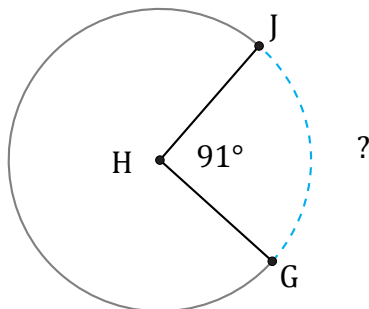
Circunferencia = 490.09 cm

$\widehat{AC} =$



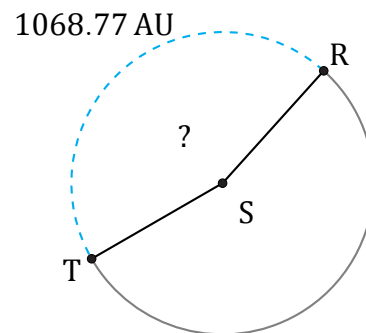
Circunferencia = 1011.59 AU

$\angle DEF =$



Circunferencia = 2318.5 m

$\widehat{GJ} =$



Circunferencia = 2375.04 AU

$\angle RST =$