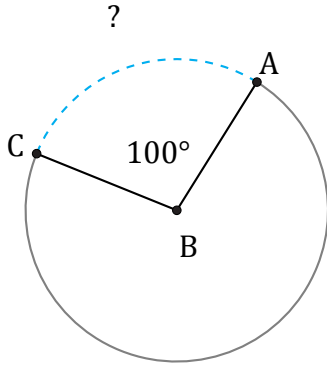


Amplitud y Longitud de Arcos (F)

Nombre: _____

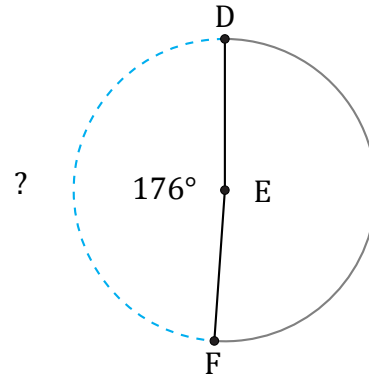
Fecha: _____

Calcule la amplitud angular o la longitud de cada arco.



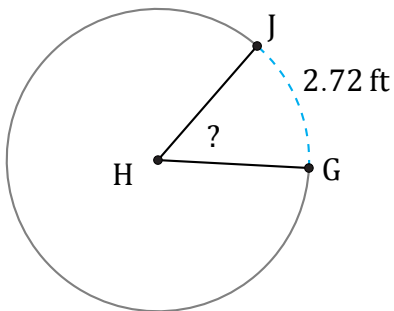
Circunferencia = 182.21 cm

$\widehat{AC} =$



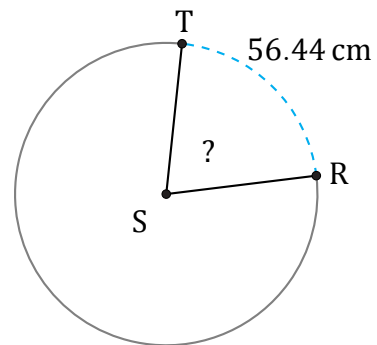
Circunferencia = 4699.82 in

$\widehat{DF} =$



Circunferencia = 18.85 ft

$\angle GHJ =$



Circunferencia = 263.89 cm

$\angle RST =$