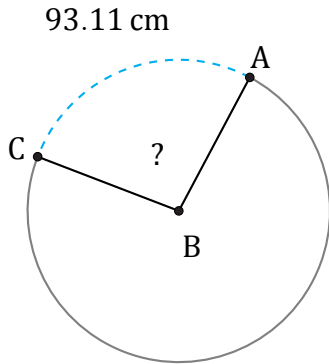


Amplitud y Longitud de Arcos (I)

Nombre: _____

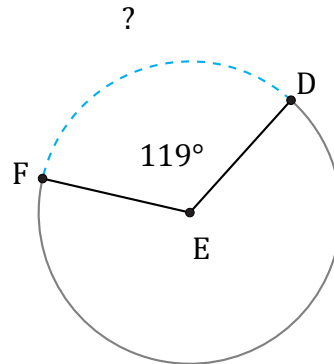
Fecha: _____

Calcule la amplitud angular o la longitud de cada arco.



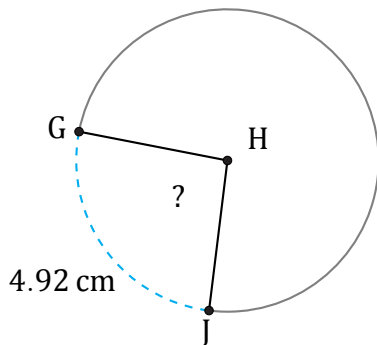
Circunferencia = 345.58 cm

$\angle ABC =$



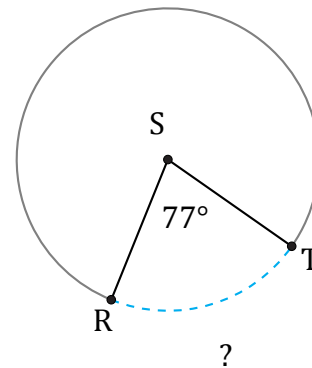
Circunferencia = 527.79 mi

$\widehat{DF} =$



Circunferencia = 18.85 cm

$\angle GHJ =$



Circunferencia = 2230.53 AU

$\widehat{RT} =$