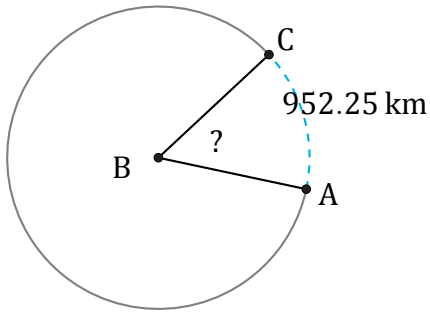


Amplitud y Longitud de Arcos (J)

Nombre: _____

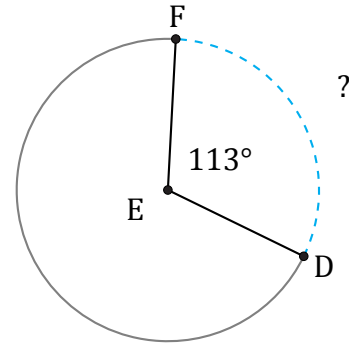
Fecha: _____

Calcule la amplitud angular o la longitud de cada arco.



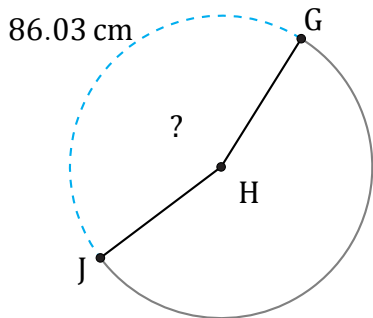
Circunferencia = 6232.92 km

$\angle ABC =$



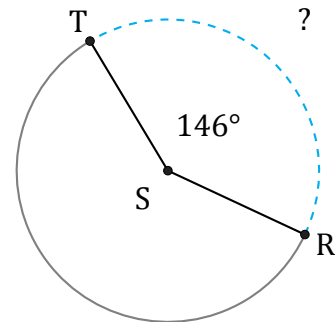
Circunferencia = 483.81 in

$\widehat{DF} =$



Circunferencia = 194.78 cm

$\angle GHJ =$



Circunferencia = 1294.34 cm

$\widehat{RT} =$