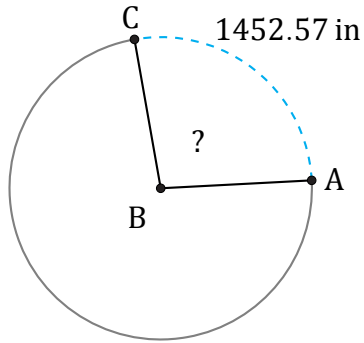


# Amplitud y Longitud de Arcos (G)

Nombre: \_\_\_\_\_

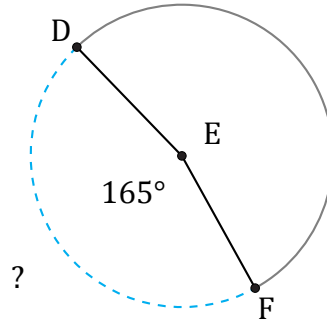
Fecha: \_\_\_\_\_

Calcule la amplitud angular o la longitud de cada arco.



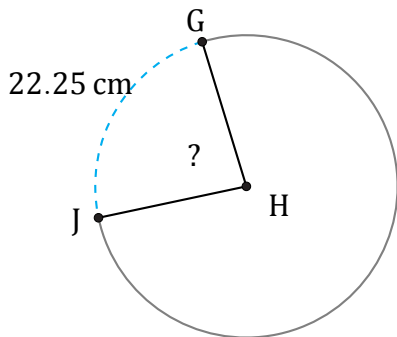
Diámetro = 1716 in

$\angle ABC =$



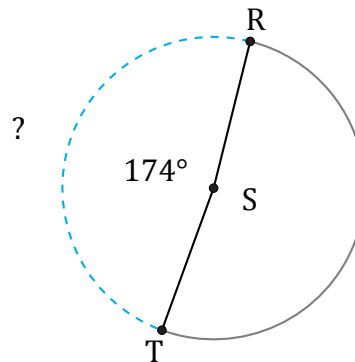
Diámetro = 44 ft

$\widehat{DF} =$



Diámetro = 30 cm

$\angle GHJ =$



Diámetro = 4 mm

$\widehat{RT} =$