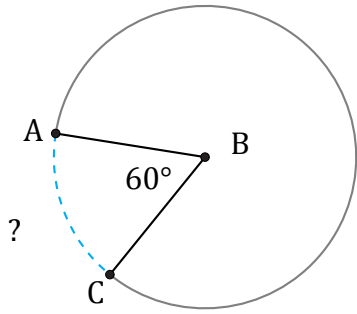


Amplitud y Longitud de Arcos (I)

Nombre: _____

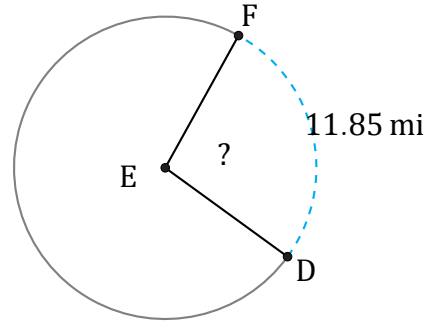
Fecha: _____

Calcule la amplitud angular o la longitud de cada arco.



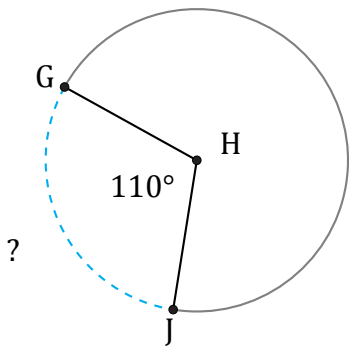
Diámetro = 10 cm

$\widehat{AC} =$



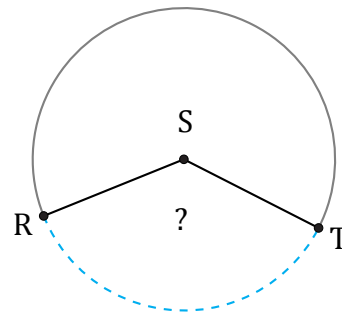
Diámetro = 14 mi

$\angle DEF =$



Diámetro = 1782 cm

$\widehat{GJ} =$



Diámetro = 8 ft

$\angle RST =$