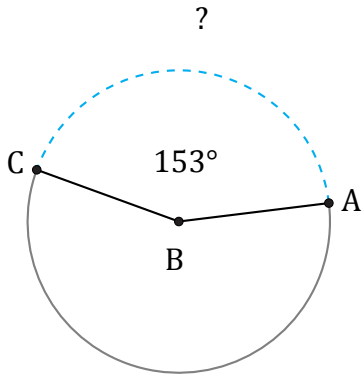


Amplitud y Longitud de Arcos (C)

Nombre: _____

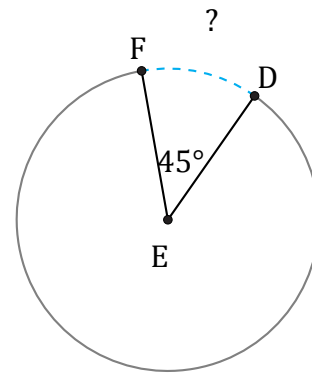
Fecha: _____

Calcule la amplitud angular o la longitud de cada arco.



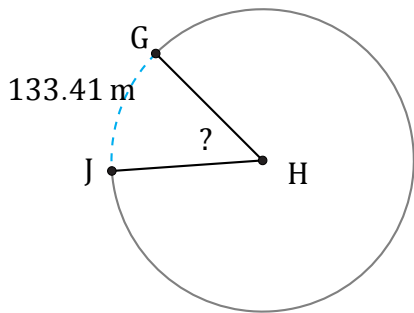
Radio = 10 mm

$\widehat{AC} =$



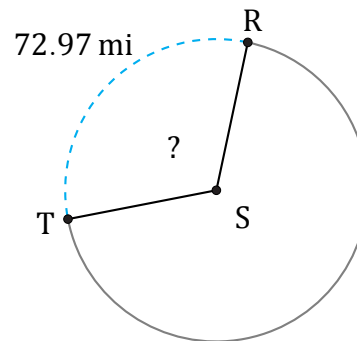
Radio = 27 ft

$\widehat{DF} =$



Radio = 156 m

$\angle GHJ =$



Radio = 37 mi

$\angle RST =$