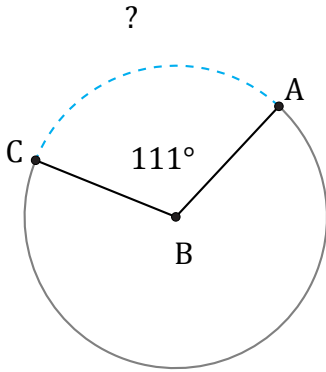


# Amplitud y Longitud de Arcos (E)

Nombre: \_\_\_\_\_

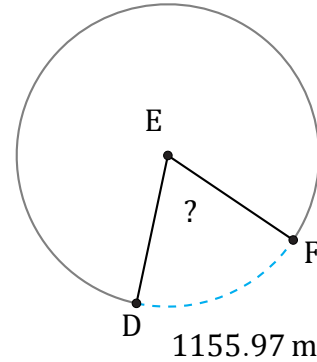
Fecha: \_\_\_\_\_

Calcule la amplitud angular o la longitud de cada arco.



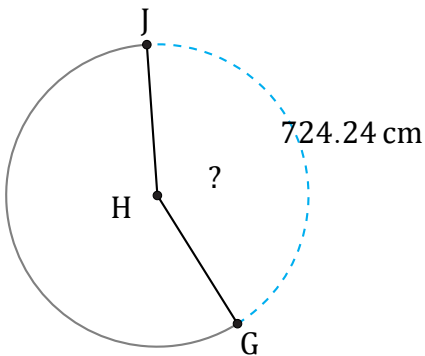
Radio = 44 in

$\widehat{AC} =$



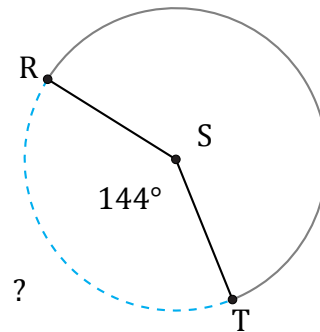
Radio = 974 m

$\angle DEF =$



Radio = 273 cm

$\angle GHJ =$



Radio = 8 AU

$\widehat{RT} =$