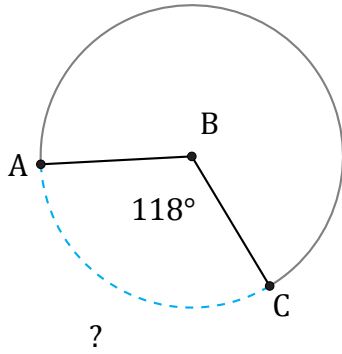


Amplitud y Longitud de Arcos (G)

Nombre: _____

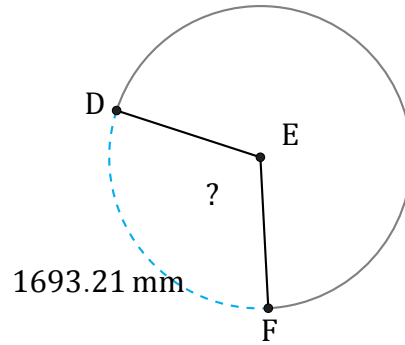
Fecha: _____

Calcule la amplitud angular o la longitud de cada arco.



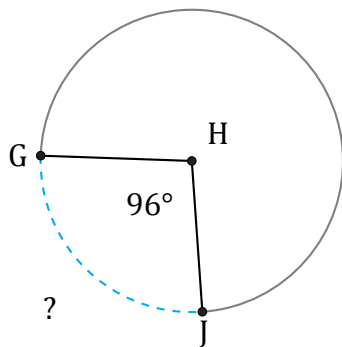
Radio = 706 mi

$\widehat{AC} =$



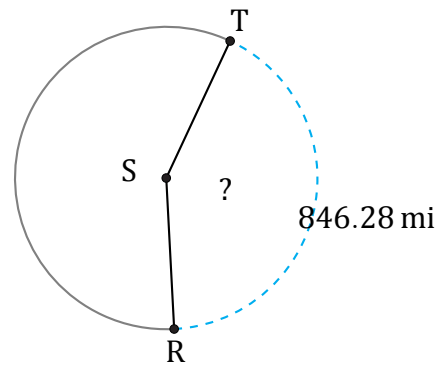
Radio = 874 mm

$\angle DEF =$



Radio = 5 km

$\widehat{GJ} =$



Radio = 319 mi

$\angle RST =$