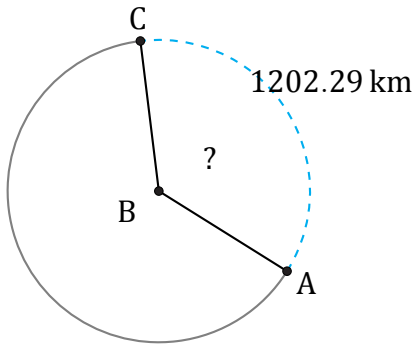


# Amplitud y Longitud de Arcos (I)

Nombre: \_\_\_\_\_

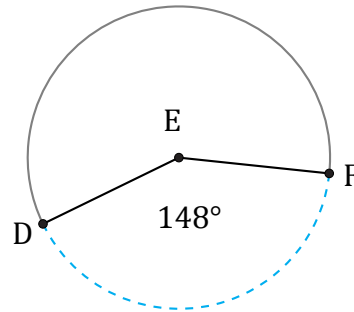
Fecha: \_\_\_\_\_

Calcule la amplitud angular o la longitud de cada arco.



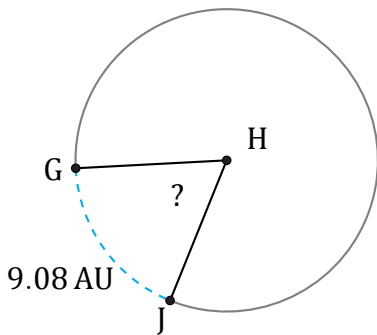
Radio =  $534 \text{ km}$

$\angle ABC =$



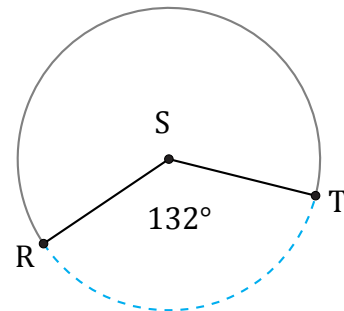
Radio =  $748 \text{ mi}$

$\widehat{DF} =$



Radio =  $8 \text{ AU}$

$\angle GHJ =$



Radio =  $6 \text{ in}$

$\widehat{RT} =$