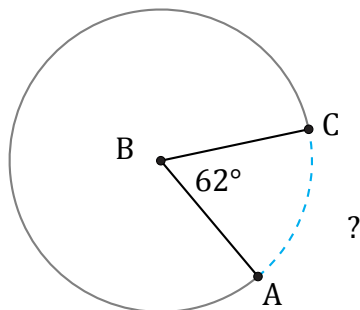


Amplitud y Longitud de Arcos (A)

Nombre: _____

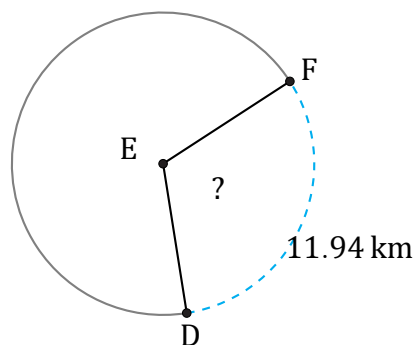
Fecha: _____

Calcule la amplitud angular o la longitud de cada arco.



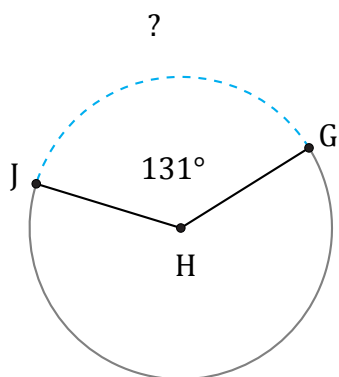
Radio = 9 in

$\widehat{AC} =$



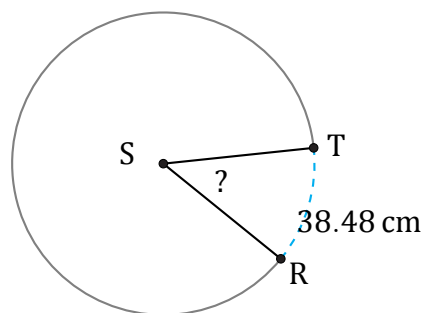
Diámetro = 12 km

$\angle DEF =$



Circunferencia = 50.27 km

$\widehat{GJ} =$



Radio = 49 cm

$\angle RST =$