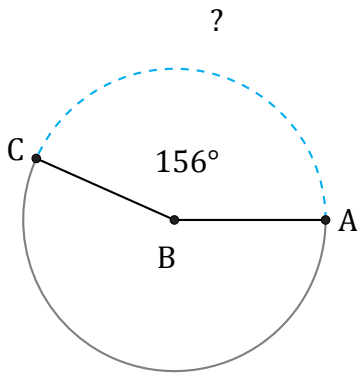


Amplitud y Longitud de Arcos (C)

Nombre: _____

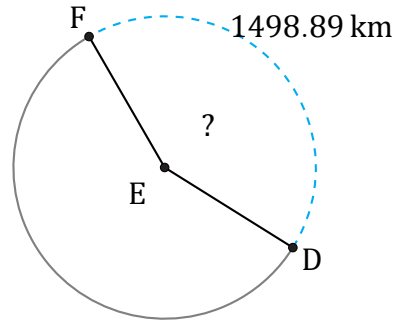
Fecha: _____

Calcule la amplitud angular o la longitud de cada arco.



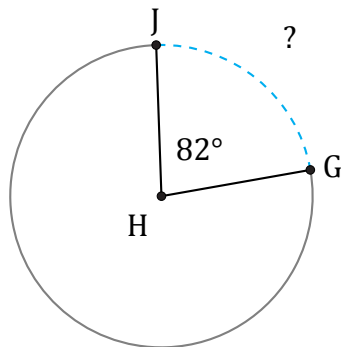
Diámetro = 6 m

$\widehat{AC} =$



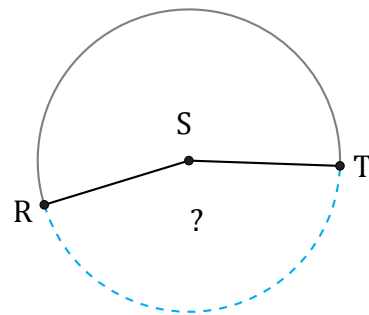
Circunferencia = 3550 km

$\angle DEF =$



Circunferencia = 25.13 in

$\widehat{GJ} =$



269.76 ft

Radio = 96 ft

$\angle RST =$