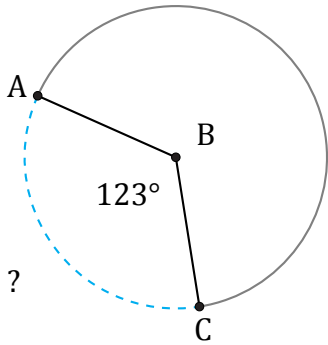


Amplitud y Longitud de Arcos (E)

Nombre: _____

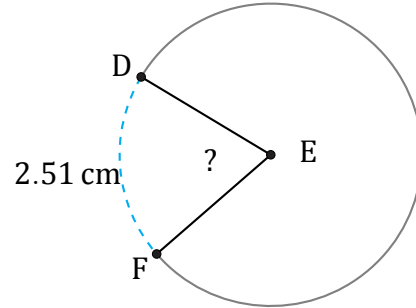
Fecha: _____

Calcule la amplitud angular o la longitud de cada arco.



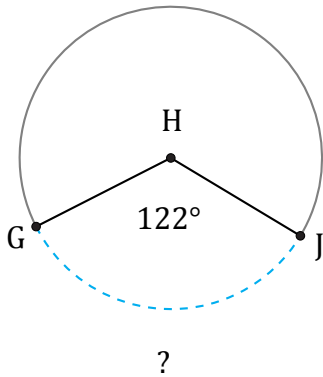
Circunferencia = 502.65 mm

$\widehat{AC} =$



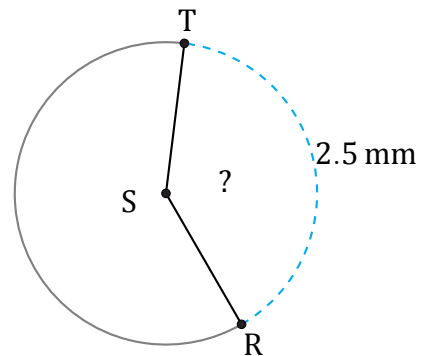
Diámetro = 4 cm

$\angle DEF =$



Circunferencia = 2569.82 ft

$\widehat{GJ} =$



Radio = 1 mm

$\angle RST =$