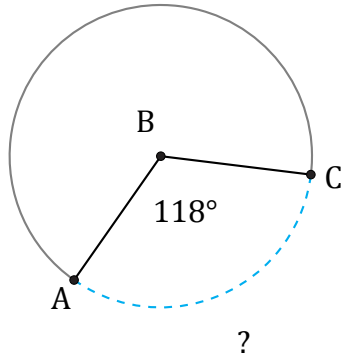


Amplitud y Longitud de Arcos (F)

Nombre: _____

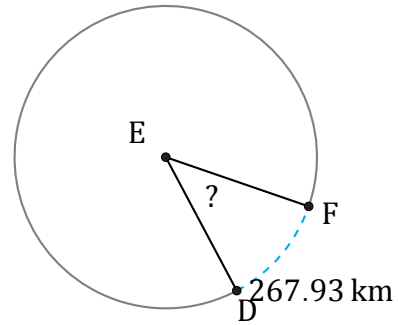
Fecha: _____

Calcule la amplitud angular o la longitud de cada arco.



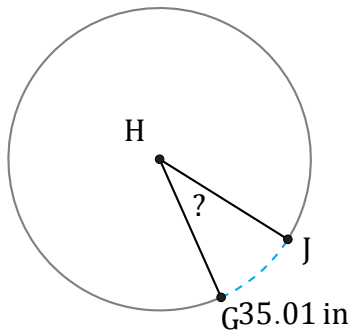
Radio = 147 mm

$\widehat{AC} =$



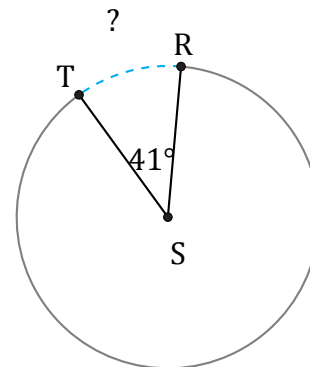
Circunferencia = 2243.1 km

$\angle DEF =$



Diámetro = 118 in

$\angle GHJ =$



Circunferencia = 483.81 mi

$\widehat{RT} =$