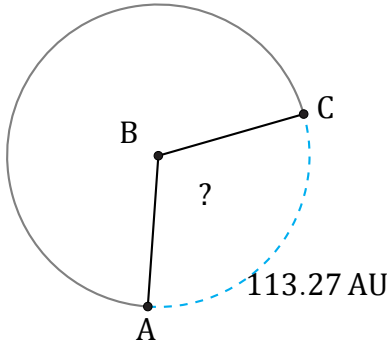


Amplitud y Longitud de Arcos (G)

Nombre: _____

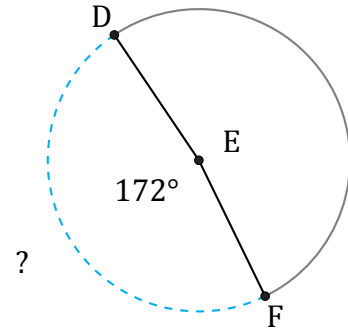
Fecha: _____

Calcule la amplitud angular o la longitud de cada arco.



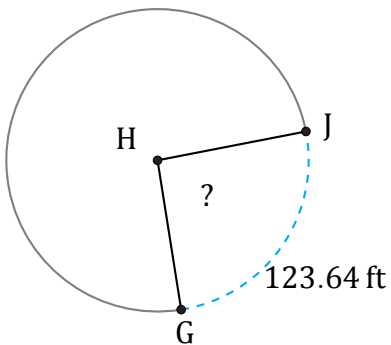
Diámetro = 118 AU

$\angle ABC =$



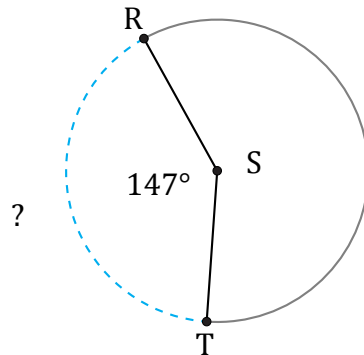
Circunferencia = 615.75 m

$\widehat{DF} =$



Radio = 77 ft

$\angle GHJ =$



Diámetro = 6 ft

$\widehat{RT} =$