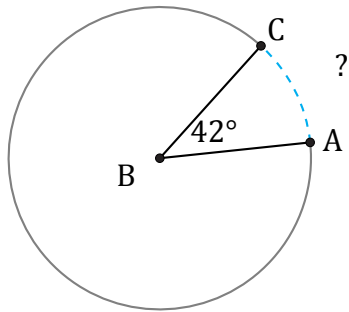


Amplitud y Longitud de Arcos (I)

Nombre: _____

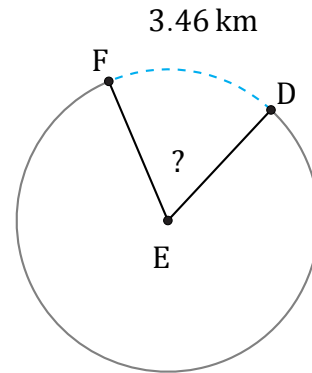
Fecha: _____

Calcule la amplitud angular o la longitud de cada arco.



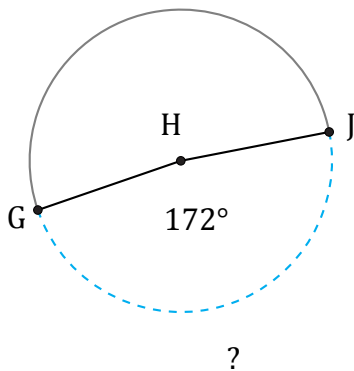
Circunferencia = 150.8 km

$\widehat{AC} =$



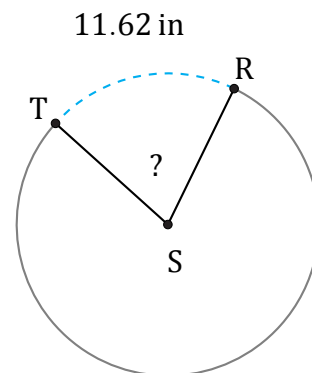
Radio = 3 km

$\angle DEF =$



Diámetro = 90 ft

$\widehat{GJ} =$



Radio = 9 in

$\angle RST =$