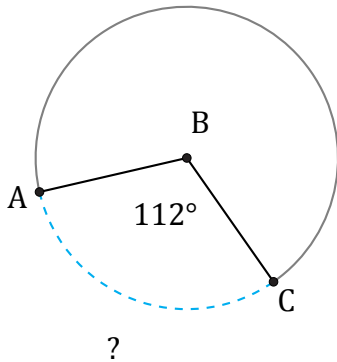


# Longitud de Arcos (A)

Nombre: \_\_\_\_\_

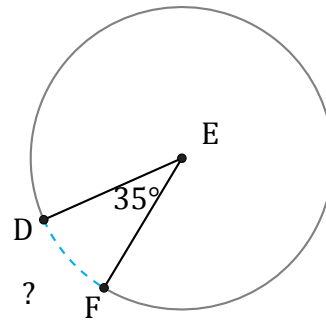
Fecha: \_\_\_\_\_

Calcule la longitud de cada arco.



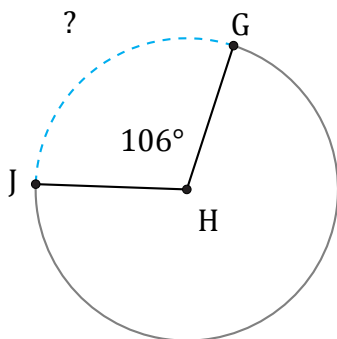
Circunferencia = 3795.04 cm

$\widehat{AC} =$



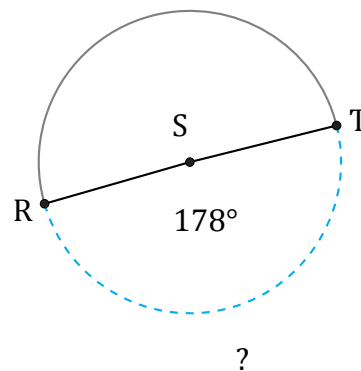
Circunferencia = 1225.22 km

$\widehat{DF} =$



Circunferencia = 194.78 AU

$\widehat{GJ} =$



Circunferencia = 25.13 AU

$\widehat{RT} =$