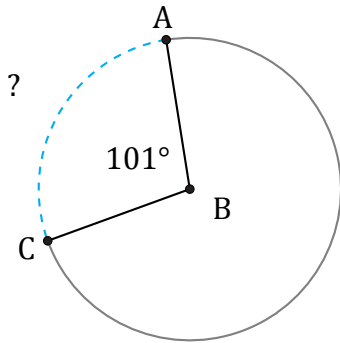


# Longitud de Arcos (B)

Nombre: \_\_\_\_\_

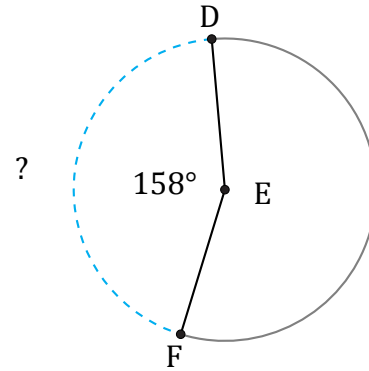
Fecha: \_\_\_\_\_

Calcule la longitud de cada arco.



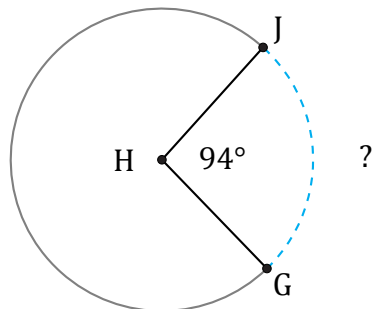
Circunferencia = 50.27 AU

$\widehat{AC} =$



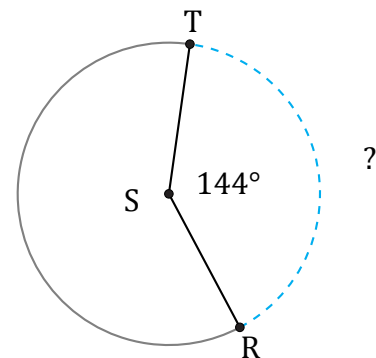
Circunferencia = 37.7 AU

$\widehat{DF} =$



Circunferencia = 56.55 m

$\widehat{GJ} =$



Circunferencia = 5510.35 cm

$\widehat{RT} =$