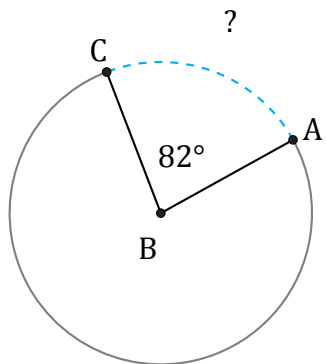


Longitud de Arcos (C)

Nombre: _____

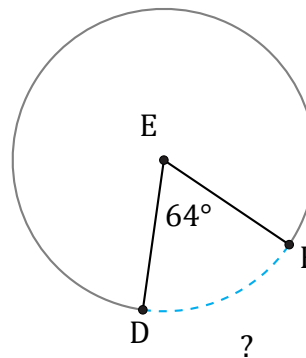
Fecha: _____

Calcule la longitud de cada arco.



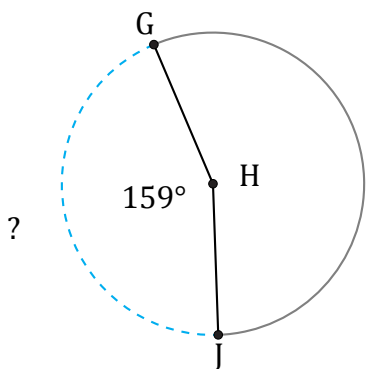
Circunferencia = 1049.29 mm

$\widehat{AC} =$



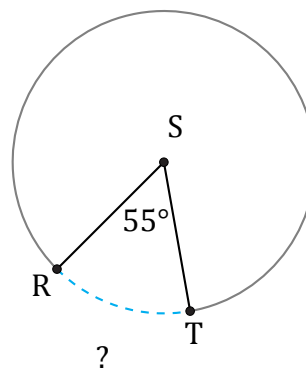
Circunferencia = 25.13 cm

$\widehat{DF} =$



Circunferencia = 502.65 AU

$\widehat{GJ} =$



Circunferencia = 18.85 AU

$\widehat{RT} =$