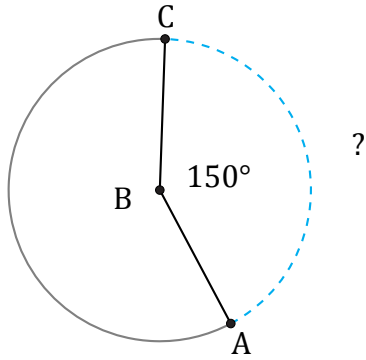


# Longitud de Arcos (E)

Nombre: \_\_\_\_\_

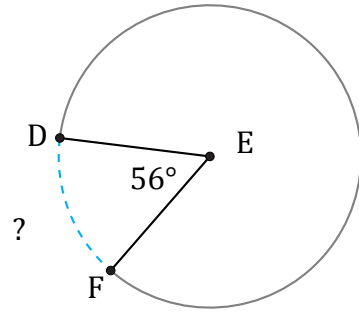
Fecha: \_\_\_\_\_

Calcule la longitud de cada arco.



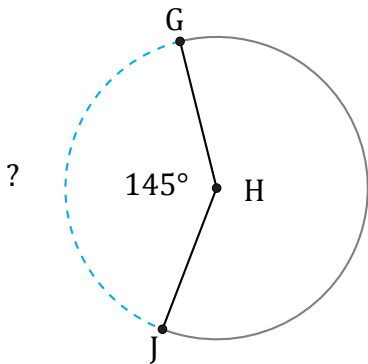
Circunferencia = 4611.86 mm

$\widehat{AC} =$



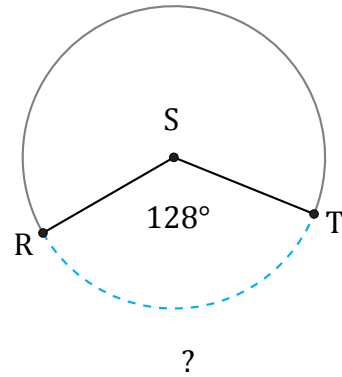
Circunferencia = 2789.73 m

$\widehat{DF} =$



Circunferencia = 201.06 ft

$\widehat{GJ} =$



Circunferencia = 540.35 AU

$\widehat{RT} =$