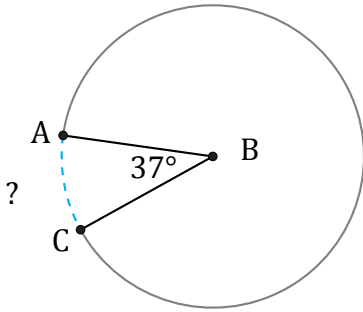


Longitud de Arcos (G)

Nombre: _____

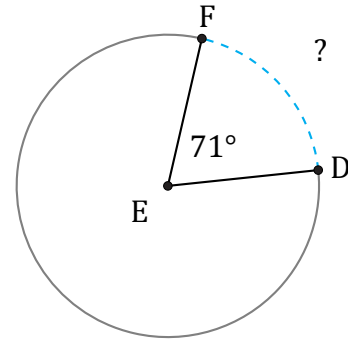
Fecha: _____

Calcule la longitud de cada arco.



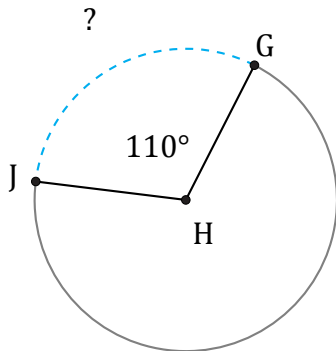
Circunferencia = 2506.99 cm

$\widehat{AC} =$



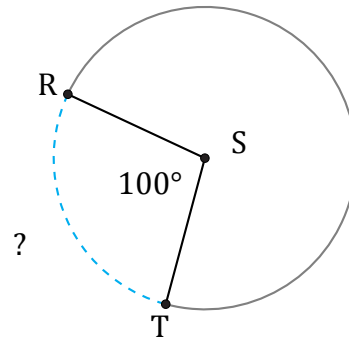
Circunferencia = 50.27 mi

$\widehat{DF} =$



Circunferencia = 2444.16 km

$\widehat{GJ} =$



Circunferencia = 5290.44 AU

$\widehat{RT} =$