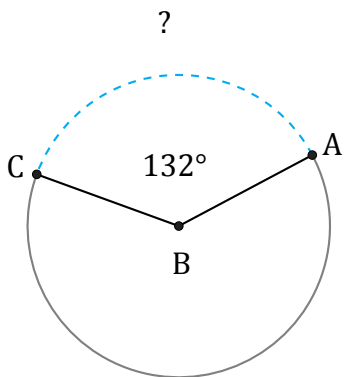


Longitud de Arcos (H)

Nombre: _____

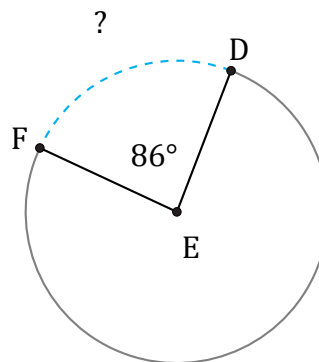
Fecha: _____

Calcule la longitud de cada arco.



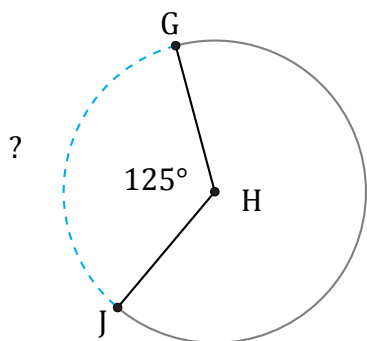
Circunferencia = 50.27 AU

$\widehat{AC} =$



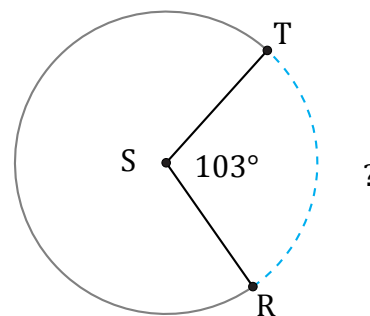
Circunferencia = 31.42 cm

$\widehat{DF} =$



Circunferencia = 414.69 cm

$\widehat{GJ} =$



Circunferencia = 289.03 AU

$\widehat{RT} =$