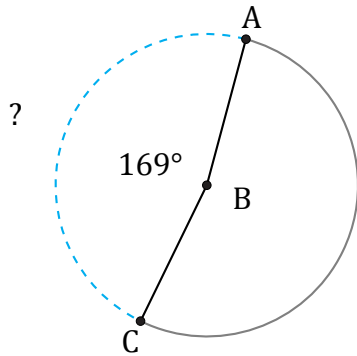


Longitud de Arcos (I)

Nombre: _____

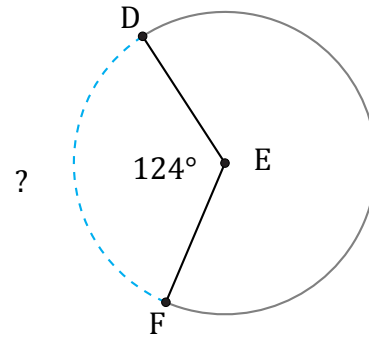
Fecha: _____

Calcule la longitud de cada arco.



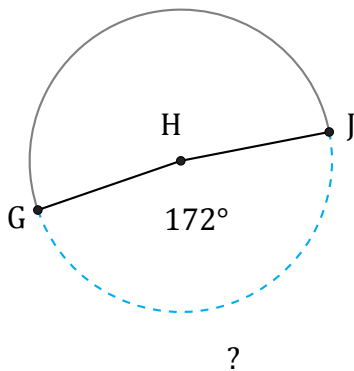
Circunferencia = 540.35 ft

$\widehat{AC} =$



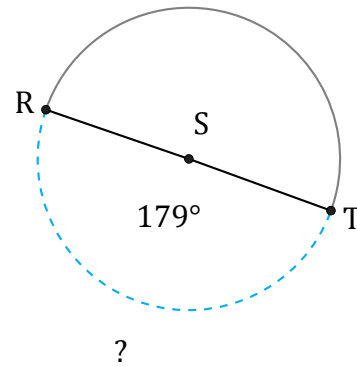
Circunferencia = 31.42 km

$\widehat{DF} =$



Circunferencia = 12.57 mi

$\widehat{GJ} =$



Circunferencia = 1281.77 cm

$\widehat{RT} =$