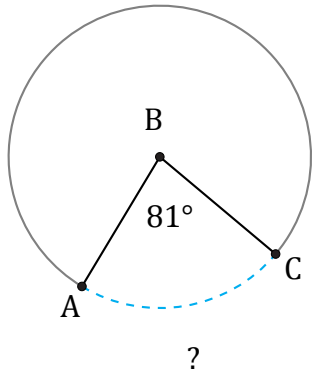


Longitud de Arcos (J)

Nombre: _____

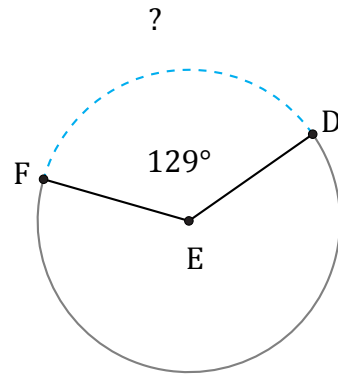
Fecha: _____

Calcule la longitud de cada arco.



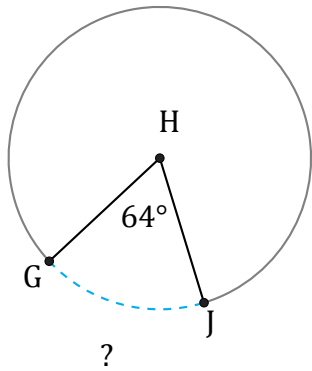
Circunferencia = 245.04 m

$\widehat{AC} =$



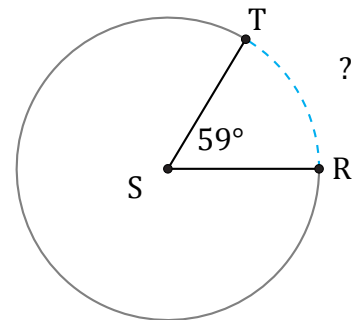
Circunferencia = 119.38 mm

$\widehat{DF} =$



Circunferencia = 3983.54 mm

$\widehat{GJ} =$



Circunferencia = 1080.71 cm

$\widehat{RT} =$