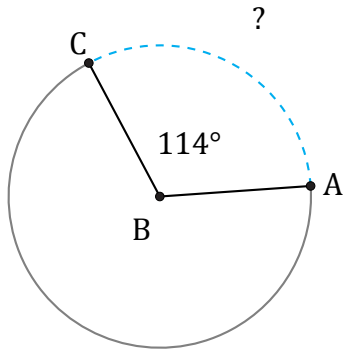


Longitud de Arcos (A)

Nombre: _____

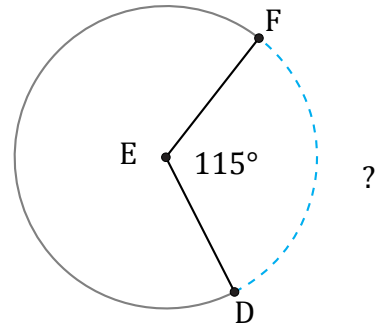
Fecha: _____

Calcule la longitud de cada arco.



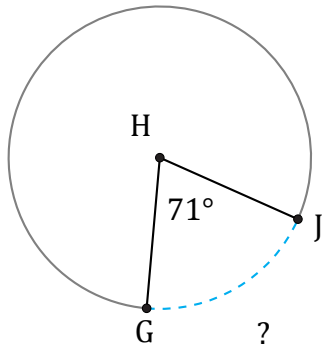
Diámetro = 8 cm

$\widehat{AC} =$



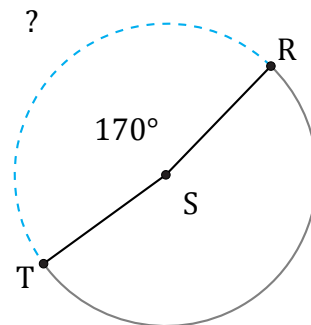
Diámetro = 374 ft

$\widehat{DF} =$



Diámetro = 1610 ft

$\widehat{Gj} =$



Diámetro = 44 mm

$\widehat{RT} =$