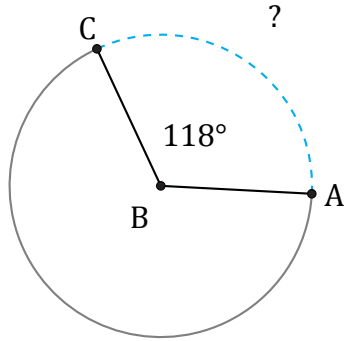


Longitud de Arcos (C)

Nombre: _____

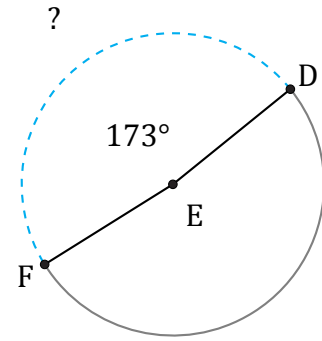
Fecha: _____

Calcule la longitud de cada arco.



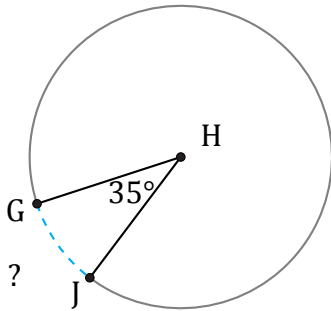
Diámetro = 20 ft

$\widehat{AC} =$



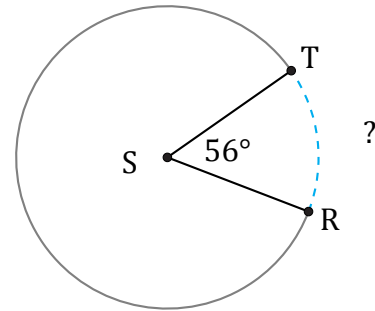
Diámetro = 966 km

$\widehat{DF} =$



Diámetro = 1782 cm

$\widehat{GJ} =$



Diámetro = 14 km

$\widehat{RT} =$