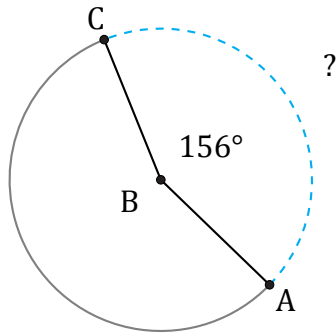


Longitud de Arcos (D)

Nombre: _____

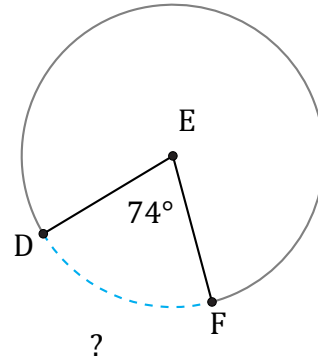
Fecha: _____

Calcule la longitud de cada arco.



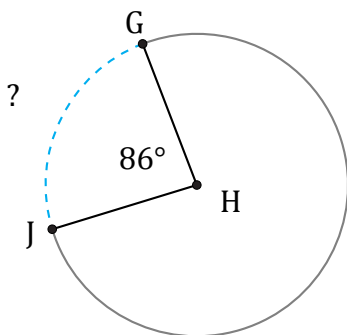
Diámetro = 64 cm

$\widehat{AC} =$



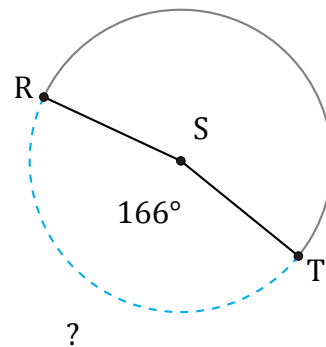
Diámetro = 18 km

$\widehat{DF} =$



Diámetro = 146 mm

$\widehat{GJ} =$



Diámetro = 1514 km

$\widehat{RT} =$