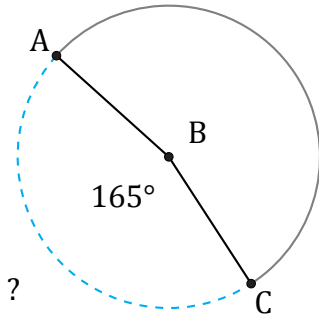


Longitud de Arcos (E)

Nombre: _____

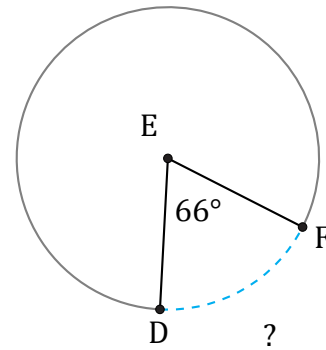
Fecha: _____

Calcule la longitud de cada arco.



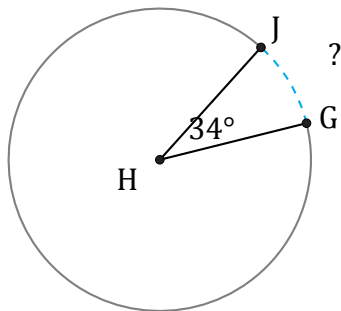
Diámetro = 10 m

$\widehat{AC} =$



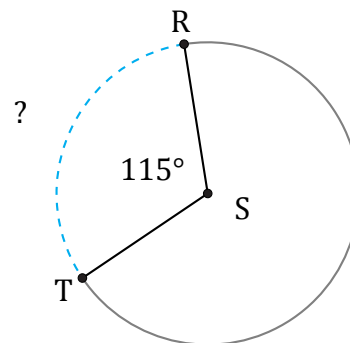
Diámetro = 8 mm

$\widehat{DF} =$



Diámetro = 542 in

$\widehat{GJ} =$



Diámetro = 6 cm

$\widehat{RT} =$