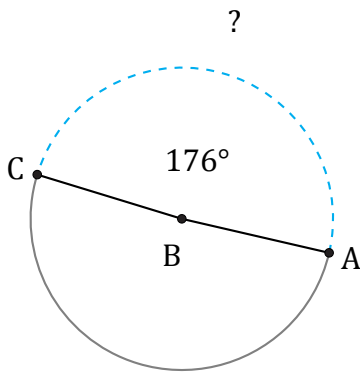


Longitud de Arcos (G)

Nombre: _____

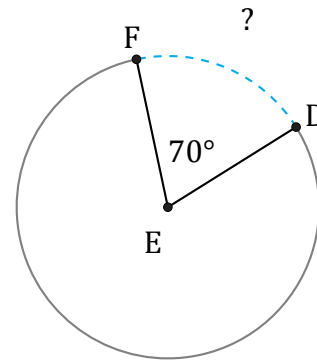
Fecha: _____

Calcule la longitud de cada arco.



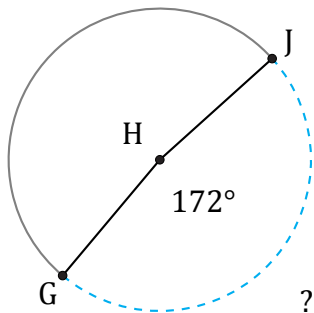
Diámetro = 4 AU

$\widehat{AC} =$



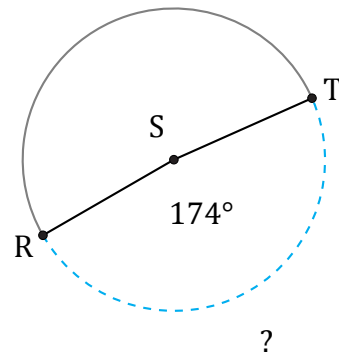
Diámetro = 60 mi

$\widehat{DF} =$



Diámetro = 192 AU

$\widehat{GJ} =$



Diámetro = 26 mi

$\widehat{RT} =$