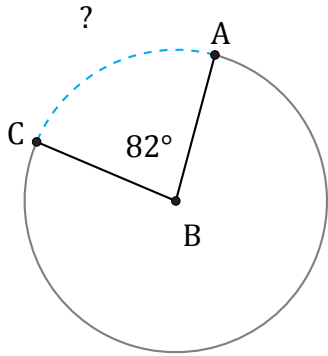


Longitud de Arcos (J)

Nombre: _____

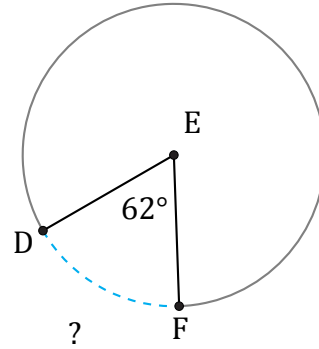
Fecha: _____

Calcule la longitud de cada arco.



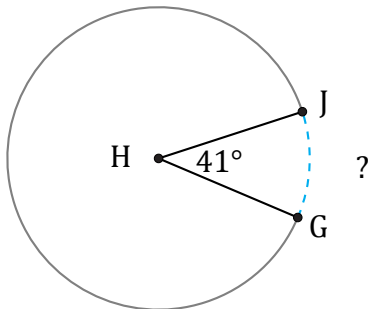
Diámetro = 8 mm

$\widehat{AC} =$



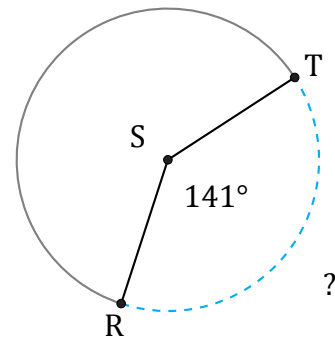
Diámetro = 526 mi

$\widehat{DF} =$



Diámetro = 14 mi

$\widehat{GJ} =$



Diámetro = 12 mm

$\widehat{RT} =$