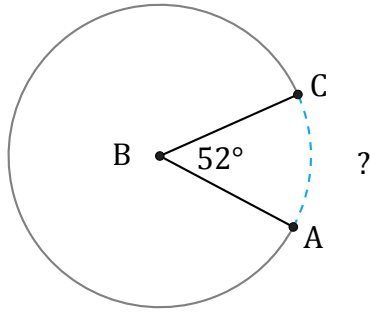


# Longitud de Arcos (A)

Nombre: \_\_\_\_\_

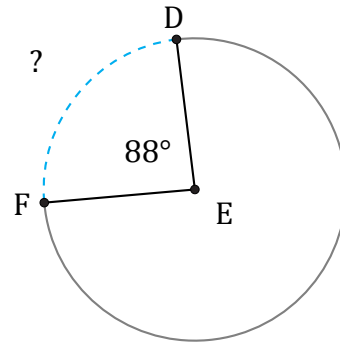
Fecha: \_\_\_\_\_

Calcule la longitud de cada arco.



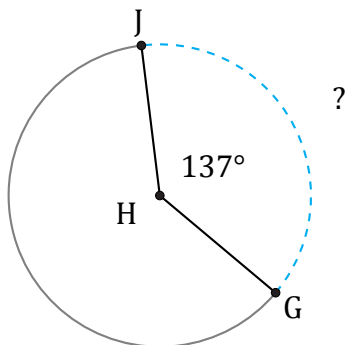
Radio = 23 mm

$\widehat{AC} =$



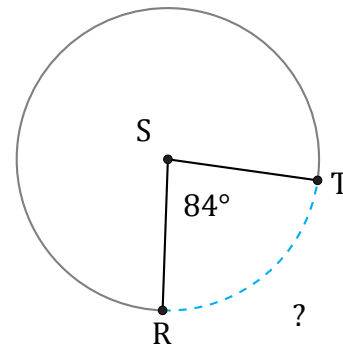
Radio = 29 AU

$\widehat{DF} =$



Radio = 276 mm

$\widehat{GJ} =$



Radio = 638 km

$\widehat{RT} =$