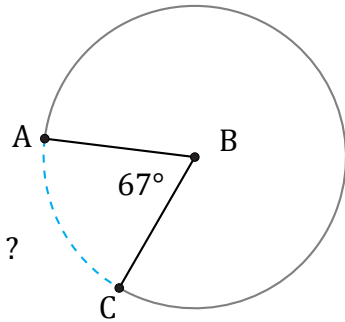


Longitud de Arcos (B)

Nombre: _____

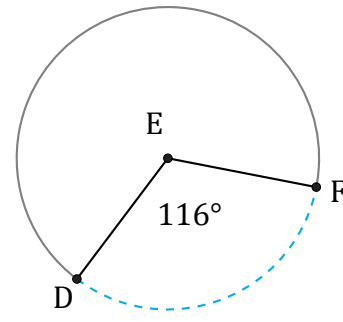
Fecha: _____

Calcule la longitud de cada arco.



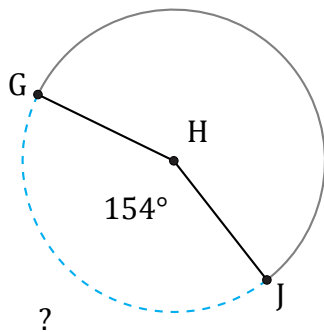
Radio = 82 m

$\widehat{AC} =$



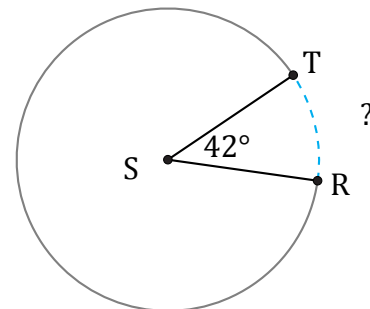
Radio = 8 in

$\widehat{DF} =$



Radio = 7 ft

$\widehat{GJ} =$



Radio = 906 in

$\widehat{RT} =$