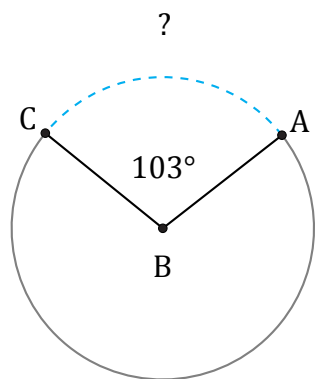


# Longitud de Arcos (C)

Nombre: \_\_\_\_\_

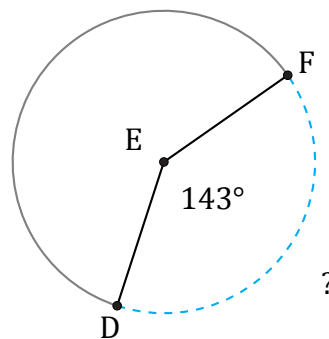
Fecha: \_\_\_\_\_

Calcule la longitud de cada arco.



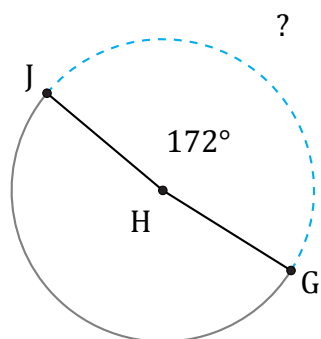
Radio = 6 in

$\widehat{AC} =$



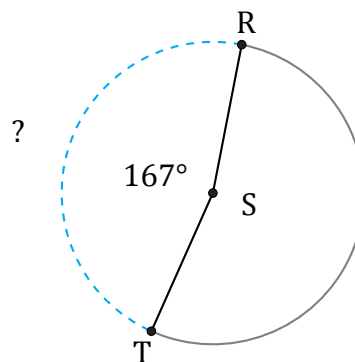
Radio = 48 AU

$\widehat{DF} =$



Radio = 728 km

$\widehat{GJ} =$



Radio = 580 km

$\widehat{RT} =$