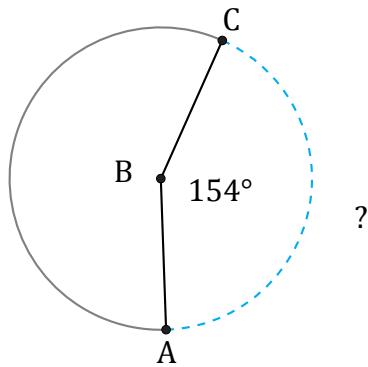


Longitud de Arcos (D)

Nombre: _____

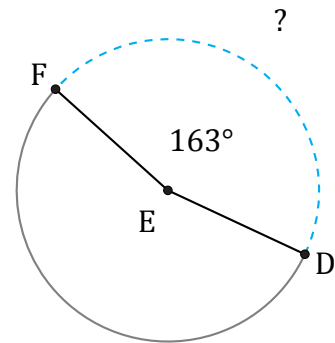
Fecha: _____

Calcule la longitud de cada arco.



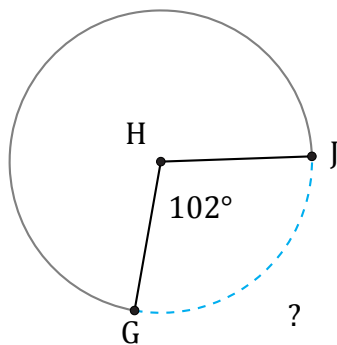
Radio = 6 ft

$\widehat{AC} =$



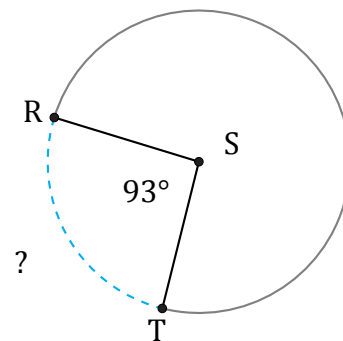
Radio = 92 mm

$\widehat{DF} =$



Radio = 601 cm

$\widehat{GJ} =$



Radio = 5 mm

$\widehat{RT} =$