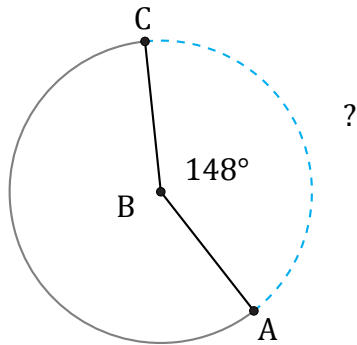


Longitud de Arcos (E)

Nombre: _____

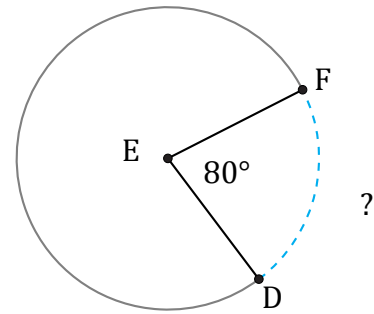
Fecha: _____

Calcule la longitud de cada arco.



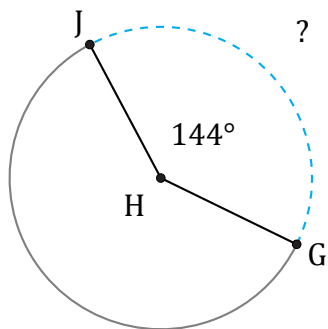
Radio = 400 AU

$\widehat{AC} =$



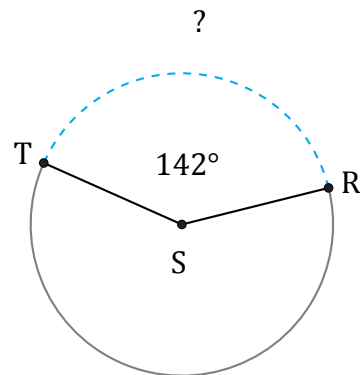
Radio = 4 mm

$\widehat{DF} =$



Radio = 13 m

$\widehat{GJ} =$



Radio = 2 ft

$\widehat{RT} =$