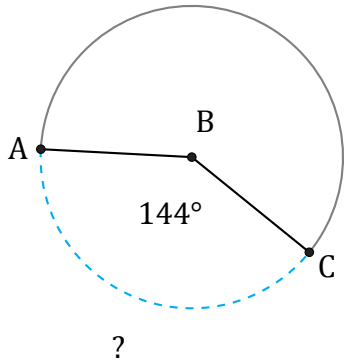


Longitud de Arcos (G)

Nombre: _____

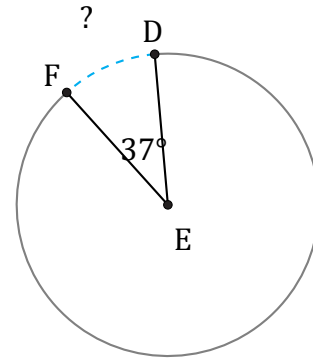
Fecha: _____

Calcule la longitud de cada arco.



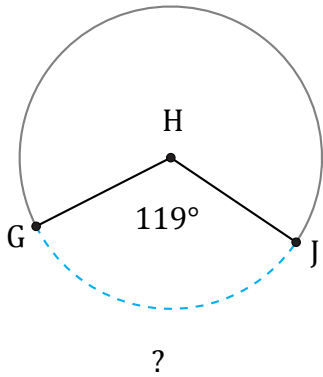
Radio = 348 in

$\widehat{AC} =$



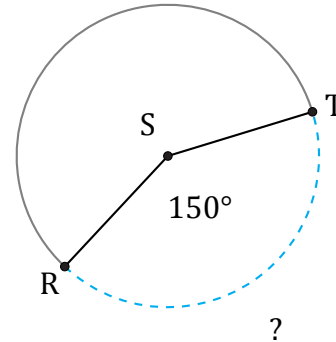
Radio = 7 mm

$\widehat{DF} =$



Radio = 4 AU

$\widehat{GJ} =$



Radio = 798 AU

$\widehat{RT} =$