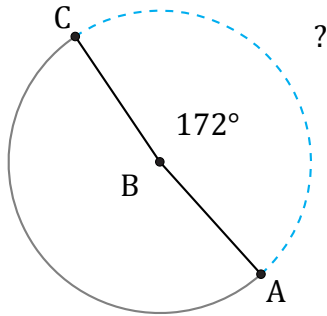


Longitud de Arcos (H)

Nombre: _____

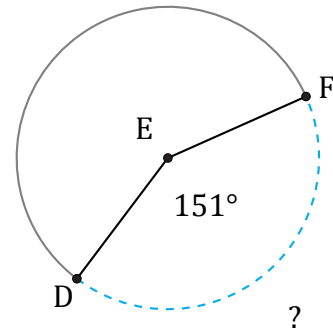
Fecha: _____

Calcule la longitud de cada arco.



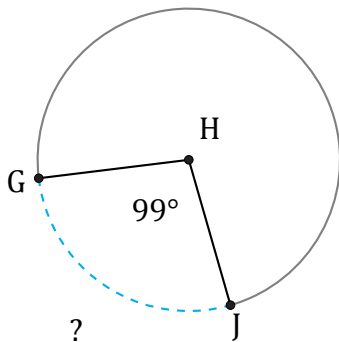
Radio = 7 in

$\widehat{AC} =$



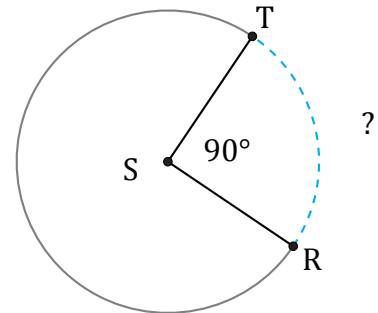
Radio = 84 mi

$\widehat{DF} =$



Radio = 140 mm

$\widehat{GJ} =$



Radio = 10 mi

$\widehat{RT} =$